

IB SA & MTS

Previous Year Paper

20 Dec, 2023

Test Prime

**ALL EXAMS,
ONE SUBSCRIPTION**



70,000+
Mock Tests



**Personalised
Report Card**



**Unlimited
Re-Attempt**



600+
Exam Covered



**Previous Year
Papers**



**500%
Refund**



ATTEMPT FREE MOCK NOW

INTELLIGENCE BUREAU

(Ministry of Home Affairs)

Government of India

Application Seq. No.	
Participant ID	
Participant Name	
Test Center Name	
Test Date	20/12/2023
Test Time	11:30 AM - 12:30 PM
Post Name	Both

Section : General Awareness

Q.1 Microfinance is a category of financial services targeting individuals and small businesses that lack access to conventional _____ and related services.

- Ans
- ☒ 1. transport
 - ☒ 2. banking
 - ☒ 3. manpower
 - ☒ 4. security

Question ID : 630680520113
Option 1 ID : 6306802032884
Option 2 ID : 6306802032881
Option 3 ID : 6306802032883
Option 4 ID : 6306802032882
Status : Answered
Chosen Option : 2

Q.2 What should you do when you come across a traffic light displaying a Flashing Red Signal?

- Ans
- ☒ 1. Stop well before the stop line
 - ☒ 2. You must come to a complete stop
 - ☒ 3. You should slow down and proceed with caution
 - ☒ 4. Proceed with caution

Question ID : 630680520141
Option 1 ID : 6306802032994
Option 2 ID : 6306802032993
Option 3 ID : 6306802032995
Option 4 ID : 6306802032996
Status : Answered
Chosen Option : 2

Q.3 Which one of the following terms was amended by Supreme Court of India in its handbook on gender stereotypes?

- Ans ☒ 1. Call girl
☒ 2. Sex worker
☒ 3. Punters
☒ 4. Handicapped

Question ID : 630680520106
Option 1 ID : 6306802032856
Option 2 ID : 6306802032854
Option 3 ID : 6306802032853
Option 4 ID : 6306802032855
Status : Not Answered
Chosen Option : --

Q.4 When should you turn on the headlights before sunset?

- Ans ☒ 1. 45 minutes
☒ 2. 10 minutes
☒ 3. 30 minutes
☒ 4. 60 minutes

Question ID : 630680520144
Option 1 ID : 6306802033007
Option 2 ID : 6306802033005
Option 3 ID : 6306802033006
Option 4 ID : 6306802033008
Status : Not Answered
Chosen Option : --

Q.5 As per Census 2011, the sex ratio for rural areas in India was _____.

- Ans ☒ 1. 929
☒ 2. 923
☒ 3. 943
☒ 4. 949

Question ID : 630680520118
Option 1 ID : 6306802032902
Option 2 ID : 6306802032901
Option 3 ID : 6306802032903
Option 4 ID : 6306802032904
Status : Not Answered
Chosen Option : --

Q.6 Which of the dashboard lights comes on when the parking brake is engaged with the ignition switch in the "ON" position?

Ans

✓ 1.



✗ 2.



✗ 3.



✗ 4.



Question ID : 630680520148

Option 1 ID : 6306802033023

Option 2 ID : 6306802033024

Option 3 ID : 6306802033022

Option 4 ID : 6306802033021

Status : Not Answered

Chosen Option : --

Q.7 As per Census 2011, which of the following states had sex ratio more than 900 in urban areas, as per Census 2011?

I. Gujarat

II. Punjab

Ans

✓ 1. Neither I nor II

✗ 2. Only II

✗ 3. Only I

✗ 4. Both I and II

Question ID : 630680520119

Option 1 ID : 6306802032908

Option 2 ID : 6306802032906

Option 3 ID : 6306802032905

Option 4 ID : 6306802032907

Status : Answered

Chosen Option : 2

Q.8 In the context of the Indian national movement, which of the following statements is correct regarding the Hindustan Socialist Republican Association (HSRA)?

- I. It was founded in 1928 at Ferozeshah Kotla in Delhi.
II. Subhas Chandra Bose and Bal Gangadhar Tilak were among the founder-members of the HSRA.

- Ans ☒ 1. Only I
☐ 2. Only II
☐ 3. Both I and II
☐ 4. Neither I nor II

Question ID : 630680520112
Option 1 ID : 6306802032877
Option 2 ID : 6306802032878
Option 3 ID : 6306802032879
Option 4 ID : 6306802032880
Status : Answered
Chosen Option : 4

Q.9 The Union Cabinet approved the eCourts Project phase III with financial outlay of Rs. _____.

- Ans ☐ 1. 55 crore
☐ 2. 6500 crore
☒ 3. 7210 crore
☐ 4. 6210 crore

Question ID : 630680520105
Option 1 ID : 6306802032852
Option 2 ID : 6306802032850
Option 3 ID : 6306802032849
Option 4 ID : 6306802032851
Status : Not Answered
Chosen Option : --

Q.10 "National Quantum Mission" was approved by the union cabinet on April 2023 at a total cost of Rs. _____.

- Ans ☒ 1. 6003.65 crore
☐ 2. 4006.00 crore
☐ 3. 5500.25 crore
☐ 4. 3004.23 crore

Question ID : 630680520102
Option 1 ID : 6306802032840
Option 2 ID : 6306802032838
Option 3 ID : 6306802032839
Option 4 ID : 6306802032837
Status : Answered
Chosen Option : 1

Q.11 Microfinance is an economic tool designed to promote financial inclusion, which enables poor and low-income households for which of the following?

- I. To come out of poverty.
- II. To increase their income levels.
- III. To improve their overall living standards.

Ans ☒ 1. Only I and III
☒ 2. I, II and III
☒ 3. Only II and III
☒ 4. Only I and II

Question ID : **630680520115**
Option 1 ID : **6306802032891**
Option 2 ID : **6306802032892**
Option 3 ID : **6306802032890**
Option 4 ID : **6306802032889**
Status : **Answered**
Chosen Option : **2**

Q.12 The Supreme Court of India directed Centre to collect data from states, UTs on social security schemes belonging to _____.

Ans ☒ 1. Old age person
☒ 2. Minorities
☒ 3. Disabled person
☒ 4. Womens

Question ID : **630680520104**
Option 1 ID : **6306802032846**
Option 2 ID : **6306802032848**
Option 3 ID : **6306802032845**
Option 4 ID : **6306802032847**
Status : **Not Answered**
Chosen Option : **--**

Q.13 Which of the following statements is correct about Harappan architecture?

- I. Each Harappan city had a well fortified citadel.
- II. The largely regular planning of the streets and certain uniformity throughout the area of Harappan culture in such features as weights and measures, the size of bricks and even the layout of the great cities are noticeable characteristics.

Ans ☒ 1. Both I and II
☒ 2. Only II
☒ 3. Only I
☒ 4. Neither I nor II

Question ID : **630680520128**
Option 1 ID : **6306802032943**
Option 2 ID : **6306802032942**
Option 3 ID : **6306802032941**
Option 4 ID : **6306802032944**
Status : **Answered**
Chosen Option : **1**

Q.14 Who wrote the book "A shot at History : My obsessive Journey to Olympic Gold and Beyond"?

- Ans
- ☒ 1. Arjun Singh
 - ☒ 2. Anantjeet Singh Naruka
 - ☒ 3. Divyansh Singh Panwar
 - ☒ 4. Abhinav Bindra

Question ID : 630680520099
Option 1 ID : 6306802032825
Option 2 ID : 6306802032827
Option 3 ID : 6306802032828
Option 4 ID : 6306802032826
Status : Answered
Chosen Option : 4

Q.15 What is the most important aspect of driving?

- Ans
- ☒ 1. Entertainment
 - ☒ 2. Multitasking
 - ☒ 3. Concentration
 - ☒ 4. Speed

Question ID : 630680520139
Option 1 ID : 6306802032988
Option 2 ID : 6306802032986
Option 3 ID : 6306802032985
Option 4 ID : 6306802032987
Status : Answered
Chosen Option : 3

Q.16 Who was the first president of the Indian National Congress?

- Ans
- ☒ 1. Dadabhai Naoraji
 - ☒ 2. Romesh Chandra Dutt
 - ☒ 3. Pherozeshah Mehta
 - ☒ 4. W.C. Bonnerjee

Question ID : 630680520111
Option 1 ID : 6306802032874
Option 2 ID : 6306802032875
Option 3 ID : 6306802032873
Option 4 ID : 6306802032876
Status : Answered
Chosen Option : 4

Q.17 Which of the following statements is correct about state executive?

- I. State executive consists of Governor and Council of Ministers with Chief Minister as its head.
II. The Governor of a State is appointed by the President for a term of five years and holds office during his pleasure.

- Ans ☒ 1. Both I and II
☐ 2. Only I
☐ 3. Neither I nor II
☐ 4. Only II

Question ID : 630680520123
Option 1 ID : 6306802032923
Option 2 ID : 6306802032921
Option 3 ID : 6306802032924
Option 4 ID : 6306802032922
Status : Answered
Chosen Option : 1

Q.18



What is the dashboard light name shown in the figure?

- Ans ☐ 1. Transaxle Warning Light
☐ 2. Brake System Warning Light
☒ 3. Immobilizer System Light
☐ 4. Oil Pressure Light

Question ID : 630680520147
Option 1 ID : 6306802033020
Option 2 ID : 6306802033019
Option 3 ID : 6306802033018
Option 4 ID : 6306802033017
Status : Answered
Chosen Option : 3

Q.19 Santiniketan institution was started in _____.

- Ans ☐ 1. 1905
☐ 2. 1907
☐ 3. 1903
☒ 4. 1901

Question ID : 630680520109
Option 1 ID : 6306802032867
Option 2 ID : 6306802032868
Option 3 ID : 6306802032866
Option 4 ID : 6306802032865
Status : Answered
Chosen Option : 2

Q.20 What is the most important point in tyre maintenance?

- Ans ☒ 1. maintaining a proper inflation pressure
- ☐ 2. Not rotating the tires
- ☐ 3. Re-treading the tires
- ☐ 4. Replacing tires with worn out treads

Question ID : 630680520146

Option 1 ID : 6306802033013

Option 2 ID : 6306802033016

Option 3 ID : 6306802033015

Option 4 ID : 6306802033014

Status : Answered

Chosen Option : 1

Q.21 Which of the following statements is correct regarding the Brahmaputra river?

- I. It is known as the Tsang po in Tibet.
II. It is known as Meghna in Bangladesh.

- Ans ☐ 1. Neither I nor II
- ☐ 2. Both I and II
- ☐ 3. Only II
- ☒ 4. Only I

Question ID : 630680520117

Option 1 ID : 6306802032900

Option 2 ID : 6306802032899

Option 3 ID : 6306802032898

Option 4 ID : 6306802032897

Status : Answered

Chosen Option : 4

Q.22 Who wrote an autobiography 'Unbreakable'?

- Ans ☐ 1. Dipa Karmakar
- ☐ 2. P.V. Sindhu
- ☒ 3. Mary Kom
- ☐ 4. Saina Nehwal

Question ID : 630680520100

Option 1 ID : 6306802032829

Option 2 ID : 6306802032831

Option 3 ID : 6306802032832

Option 4 ID : 6306802032830

Status : Not Answered

Chosen Option : --

Q.23 What should you locate first when using a map to navigate?

- Ans
- ✓ 1. Your current location and destination
 - ✗ 2. The index
 - ✗ 3. The scale of the map
 - ✗ 4. The nearest landmark

Question ID : 630680520142

Option 1 ID : 6306802032999

Option 2 ID : 6306802032998

Option 3 ID : 6306802032997

Option 4 ID : 6306802033000

Status : Answered

Chosen Option : 1

Q.24



Which of the Traffic Police Hand Signals is shown in the image?

- Ans
- ✗ 1. To start vehicles coming from right
 - To stop vehicles approaching
 - ✗ 2. simultaneously from front and behind
 - ✓ 3. To stop vehicles approaching from behind
 - ✗ 4. To change sign

Question ID : 630680520140

Option 1 ID : 6306802032991

Option 2 ID : 6306802032992

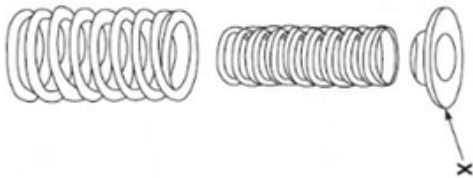
Option 3 ID : 6306802032990

Option 4 ID : 6306802032989

Status : Answered

Chosen Option : 1

Q.25



Name the part marked 'X' shown in the figure.

- Ans
- ☐ 1. Collets
 - ☐ 2. Valve Spring
 - ☐ 3. Guide
 - ☒ 4. Spring Retainer

Question ID : 630680520145

Option 1 ID : 6306802033010

Option 2 ID : 6306802033011

Option 3 ID : 6306802033009

Option 4 ID : 6306802033012

Status : Not Answered

Chosen Option : --

Q.26 Who of the following was the founder of the Servants of India Society?

- Ans
- ☐ 1. Bal Gangadhar Tilak
 - ☐ 2. Subhas Chandra Bose
 - ☐ 3. Vinayak Damodar Savarkar
 - ☒ 4. Gopal Krishna Gokhale

Question ID : 630680520110

Option 1 ID : 6306802032869

Option 2 ID : 6306802032871

Option 3 ID : 6306802032872

Option 4 ID : 6306802032870

Status : Answered

Chosen Option : 4

Q.27 Which of the following became Tamil Nadu's first biodiversity heritage site?

- Ans
- ☐ 1. Mavdasaru
 - ☐ 2. Hogrikan
 - ☒ 3. Arittapatti
 - ☐ 4. Ambaraguda

Question ID : 630680520107

Option 1 ID : 6306802032860

Option 2 ID : 6306802032858

Option 3 ID : 6306802032857

Option 4 ID : 6306802032859

Status : Answered

Chosen Option : 1

Q.28 Executive power of the State is vested in _____.

- Ans
- ☒ 1. Advocate general
 - ☒ 2. Chief minister
 - ☒ 3. Home minister
 - ☒ 4. Governor

Question ID : 630680520121
Option 1 ID : 6306802032915
Option 2 ID : 6306802032913
Option 3 ID : 6306802032914
Option 4 ID : 6306802032916
Status : Answered
Chosen Option : 2

Q.29 Which of the following Articles of the Indian Constitution is related with protection of life and personal liberty?

- Ans
- ☒ 1. Article 17
 - ☒ 2. Article 19
 - ☒ 3. Article 21
 - ☒ 4. Article 15

Question ID : 630680520120
Option 1 ID : 6306802032910
Option 2 ID : 6306802032911
Option 3 ID : 6306802032912
Option 4 ID : 6306802032909
Status : Answered
Chosen Option : 3

Q.30 Who among the following has written Mahabharata?

- Ans
- ☒ 1. Valmiki
 - ☒ 2. Tulsidas
 - ☒ 3. Maharishi Manu
 - ☒ 4. Ved Vyas

Question ID : 630680520125
Option 1 ID : 6306802032931
Option 2 ID : 6306802032932
Option 3 ID : 6306802032930
Option 4 ID : 6306802032929
Status : Answered
Chosen Option : 4

Q.31 Who is the facilitator or mentor of Self Help Group – Bank Linkage Program (SHG-BLP)?

- Ans
- ☒ 1. SIDBI
 - ☒ 2. NABARD
 - ☒ 3. SEBI
 - ☒ 4. NHB

Question ID : 630680520114
Option 1 ID : 6306802032888
Option 2 ID : 6306802032885
Option 3 ID : 6306802032887
Option 4 ID : 6306802032886
Status : Answered
Chosen Option : 2

Q.32 When should you turn on headlights in fog or rain, when visibility is reduced to _____.

- Ans
- ☒ 1. less than 150 metres
 - ☒ 2. less than 50 metres
 - ☒ 3. less than 200 metres
 - ☒ 4. less than 100 metres

Question ID : 630680520143
Option 1 ID : 6306802033003
Option 2 ID : 6306802033001
Option 3 ID : 6306802033004
Option 4 ID : 6306802033002
Status : Answered
Chosen Option : 4

Q.33 "The Race of My Life" book captures the extraordinary journey of _____.

- Ans
- ☒ 1. Hima Das
 - ☒ 2. Hitendra Singh Rawat
 - ☒ 3. Milkha Singh
 - ☒ 4. P.T. Usha

Question ID : 630680520101
Option 1 ID : 6306802032835
Option 2 ID : 6306802032836
Option 3 ID : 6306802032833
Option 4 ID : 6306802032834
Status : Not Answered
Chosen Option : --

Q.34 Which of the following is a tributary of the Krishna river?

- Ans
- ☒ 1. Wardha
 - ☒ 2. Bhima
 - ☒ 3. Kabini
 - ☒ 4. Manjra

Question ID : 630680520116
Option 1 ID : 6306802032895
Option 2 ID : 6306802032894
Option 3 ID : 6306802032896
Option 4 ID : 6306802032893
Status : Answered
Chosen Option : 2

Q.35 Timeline of the National Quantum Mission is from _____.

- Ans
- ☒ 1. 2020-21 to 2024-25
 - ☒ 2. 2024-25 to 2030-31
 - ☒ 3. 2023-24 to 2030-31
 - ☒ 4. 2022-23 to 2028-29

Question ID : 630680520103
Option 1 ID : 6306802032841
Option 2 ID : 6306802032844
Option 3 ID : 6306802032843
Option 4 ID : 6306802032842
Status : Answered
Chosen Option : 4

Q.36 Shri Kashi Vishwanath Temple is dedicated to lord _____ and is in _____.

- Ans
- ☒ 1. Vishnu, Kashi
 - ☒ 2. Shiva, Kashi
 - ☒ 3. Shiva, Prayagraj
 - ☒ 4. Vishnu, Prayagraj

Question ID : 630680520126
Option 1 ID : 6306802032933
Option 2 ID : 6306802032935
Option 3 ID : 6306802032936
Option 4 ID : 6306802032934
Status : Answered
Chosen Option : 3

Q.37 Which of the following book in English language was awarded by Sahitya Academy in 2022?

- Ans
- ☒ 1. Trying to Say Goodbye
 - ☒ 2. The Sari Shop
 - ☒ 3. Em and the bid Hoom
 - ☒ 4. All The Lives We Never Lived

Question ID : 630680520124
Option 1 ID : 6306802032926
Option 2 ID : 6306802032928
Option 3 ID : 6306802032927
Option 4 ID : 6306802032925
Status : Not Answered
Chosen Option : --

Q.38 Which of the following statement is correct about special powers of governors?

I. In respect of Nagaland, Governor has special responsibility under Article 371 A of the Constitution with respect to law and order and even though it is necessary for him to consult Council of Ministers in matters relating to law and order, he can exercise his individual judgment as to the action to be taken.
II. In respect of Arunachal Pradesh, Governor has special responsibility under Article 371H of the Constitution with respect to law and order and in discharge of his functions in relation thereto.

- Ans
- ☒ 1. Both I and II
 - ☒ 2. Only II
 - ☒ 3. Only I
 - ☒ 4. Neither I nor II

Question ID : 630680520122
Option 1 ID : 6306802032919
Option 2 ID : 6306802032918
Option 3 ID : 6306802032917
Option 4 ID : 6306802032920
Status : Answered
Chosen Option : 1

Q.39 Which one of the following states notified India's first slender loris sanctuary in October 2022?

- Ans ☒ 1. Tamil Nadu
☒ 2. Karnataka
☒ 3. Maharashtra
☒ 4. Kerala

Question ID : 630680520108
 Option 1 ID : 6306802032862
 Option 2 ID : 6306802032861
 Option 3 ID : 6306802032863
 Option 4 ID : 6306802032864
 Status : Not Answered
 Chosen Option : --

Q.40 Reh festival is celebrated by which of the following tribe of India?

- Ans ☒ 1. Hrusso
☒ 2. Adi
☒ 3. Tagin
☒ 4. Idu-mismi

Question ID : 630680520127
 Option 1 ID : 6306802032938
 Option 2 ID : 6306802032940
 Option 3 ID : 6306802032937
 Option 4 ID : 6306802032939
 Status : Answered
 Chosen Option : 4

Section : Quantitative Aptitude

Q.1 What is the sum of first five prime numbers?

- Ans ☒ 1. 28
☒ 2. 30
☒ 3. 27
☒ 4. 29

Question ID : 630680520053
 Option 1 ID : 6306802032641
 Option 2 ID : 6306802032644
 Option 3 ID : 6306802032642
 Option 4 ID : 6306802032643
 Status : Answered
 Chosen Option : 1

Q.2 M and N together can complete a work in 80 days. They started the work together but after 40 days M left the work. If the remaining work is completed by N in 100 more days, then M alone can complete the entire work in how many days?

- Ans**
- ☒ 1. 350/3 days
 - ☒ 2. 180 days
 - ☒ 3. 150 days
 - ☒ 4. 400/3 days

Question ID : 630680520062
Option 1 ID : 6306802032677
Option 2 ID : 6306802032678
Option 3 ID : 6306802032680
Option 4 ID : 6306802032679
Status : Not Answered
Chosen Option : --

Q.3 What is the solution to the following system of equation?

$$\begin{aligned} 3x + 2y + z &= 2 \\ 4x + 3y - z &= 7 \\ 2x + 7y + 2z &= -7 \end{aligned}$$

- Ans**
- ☒ 1. $x = 2, y = 1, z = -2$
 - ☒ 2. $x = -1, y = 3, z = -1$
 - ☒ 3. $x = 2, y = -1, z = -2$
 - ☒ 4. $x = 1, y = -2, z = 2$

Question ID : 630680520065
Option 1 ID : 6306802032691
Option 2 ID : 6306802032692
Option 3 ID : 6306802032689
Option 4 ID : 6306802032690
Status : Not Answered
Chosen Option : --

Q.4 A train starts at 4:00 pm from Mumbai and move towards Ahmedabad at the speed of 27 km/hr. Another train starts from Ahmedabad at 7 pm and moves towards Mumbai at the speed of 45 km/hr. If the distance between Mumbai and Ahmedabad is 513 km, then at what time both the trains will meet?

- Ans**
- ☒ 1. 2:00 am
 - ☒ 2. 12:00 am
 - ☒ 3. 1:00 am
 - ☒ 4. 11:00 pm

Question ID : 630680520063
Option 1 ID : 6306802032682
Option 2 ID : 6306802032684
Option 3 ID : 6306802032681
Option 4 ID : 6306802032683
Status : Not Answered
Chosen Option : --

Q.5 A cone is kept on a cylinder. The base of cone and cylinder are identical. The height of the conical part is 6 cm and height of the cylindrical part is 4 cm. If the diameter of the cone is 21 cm, then what is the volume of the solid?

- Ans**
- ☒ 1. 1862 cm^3
 - ☒ 2. 2079 cm^3
 - ☒ 3. 2479 cm^3
 - ☒ 4. 2169 cm^3

Question ID : **630680520067**
Option 1 ID : **6306802032699**
Option 2 ID : **6306802032697**
Option 3 ID : **6306802032700**
Option 4 ID : **6306802032698**
Status : **Not Answered**
Chosen Option : --

Q.6 The difference between the compound interest (compounding annually) and simple interest on a sum at the rate of 40 percent per annum for 2 years is Rs. 2400. What is the sum?

- Ans**
- ☒ 1. Rs. 18000
 - ☒ 2. Rs. 20000
 - ☒ 3. Rs. 17500
 - ☒ 4. Rs. 15000

Question ID : **630680520052**
Option 1 ID : **6306802032639**
Option 2 ID : **6306802032640**
Option 3 ID : **6306802032637**
Option 4 ID : **6306802032638**
Status : **Not Answered**
Chosen Option : --

Q.7 Distance of a chord JK from the centre is 7 cm. If diameter of this circle is 50 cm, then what will be length of this chord?

- Ans**
- ☒ 1. 24 cm
 - ☒ 2. 48 cm
 - ☒ 3. 74 cm
 - ☒ 4. 96 cm

Question ID : **630680520068**
Option 1 ID : **6306802032701**
Option 2 ID : **6306802032702**
Option 3 ID : **6306802032704**
Option 4 ID : **6306802032703**
Status : **Not Answered**
Chosen Option : --

Q.8 A person lent certain sum of money at the annual rate of 5 percent on simple interest and the interest received in 16 years is Rs. 700 less than the sum lent. What is the sum lent?

- Ans**
- ☒ 1. Rs. 3000
 - ☒ 2. Rs. 3500
 - ☒ 3. Rs. 4000
 - ☒ 4. Rs. 2000

Question ID : 630680520051
 Option 1 ID : 6306802032634
 Option 2 ID : 6306802032635
 Option 3 ID : 6306802032636
 Option 4 ID : 6306802032633
 Status : Not Answered
 Chosen Option : --

Q.9 If two successive discounts of 20 percent and 30 percent are given on an article, then what will be the net discount?

- Ans**
- ☒ 1. 40 percent
 - ☒ 2. 50 percent
 - ☒ 3. 44 percent
 - ☒ 4. 56 percent

Question ID : 630680520059
 Option 1 ID : 6306802032666
 Option 2 ID : 6306802032665
 Option 3 ID : 6306802032667
 Option 4 ID : 6306802032668
 Status : Answered
 Chosen Option : 3

Q.10 Height of a cone is 15 cm and radius of its base is 21 cm. What is the volume of the cone?

- Ans**
- ☒ 1. 6590 cm³
 - ☒ 2. 7680 cm³
 - ☒ 3. 7240 cm³
 - ☒ 4. 6930 cm³

Question ID : 630680520066
 Option 1 ID : 6306802032695
 Option 2 ID : 6306802032696
 Option 3 ID : 6306802032694
 Option 4 ID : 6306802032693
 Status : Not Answered
 Chosen Option : --

Q.11 Which of the following is the largest two digit prime number?

- Ans
- ☒ 1. 89
 - ☒ 2. 99
 - ☒ 3. 97
 - ☒ 4. 93

Question ID : 630680520054
Option 1 ID : 6306802032648
Option 2 ID : 6306802032647
Option 3 ID : 6306802032646
Option 4 ID : 6306802032645
Status : Answered
Chosen Option : 3

Q.12 Two numbers are in the ratio of 13 : 5. If their sum is 54, then what is the sum of the squares of the two numbers?

- Ans
- ☒ 1. 2916
 - ☒ 2. 1627
 - ☒ 3. 1746
 - ☒ 4. 1521

Question ID : 630680520060
Option 1 ID : 6306802032670
Option 2 ID : 6306802032672
Option 3 ID : 6306802032671
Option 4 ID : 6306802032669
Status : Answered
Chosen Option : 3

Q.13 The average height of two men J and K is 171 cm. Another man L Joins them and the average height becomes 166 cm. If another man M whose height is 21 cm more than that of L replaces J, then the average height of K, L and M becomes 161 cm. What is the height of J?

- Ans
- ☒ 1. 192 cm
 - ☒ 2. 196 cm
 - ☒ 3. 191 cm
 - ☒ 4. 187 cm

Question ID : 630680520050
Option 1 ID : 6306802032631
Option 2 ID : 6306802032630
Option 3 ID : 6306802032629
Option 4 ID : 6306802032632
Status : Not Answered
Chosen Option : --

Q.14 The average age of 34 students is 17 years. It was observed that while calculating the average age, the age of a student was taken as 10 years instead of 8 years. What will be the correct average age?

- Ans**
- ☒ 1. 19.29 years
 - ☒ 2. 15.87 years
 - ☒ 3. 17.28 years
 - ☒ 4. 16.94 years

Question ID : 630680520049
Option 1 ID : 6306802032628
Option 2 ID : 6306802032627
Option 3 ID : 6306802032625
Option 4 ID : 6306802032626
Status : Not Answered
Chosen Option : --

Q.15 Two numbers are in the ratio of 3 : 5. If the sum of the two numbers is 96, then what is the difference between the two numbers?

- Ans**
- ☒ 1. 96
 - ☒ 2. 48
 - ☒ 3. 24
 - ☒ 4. 36

Question ID : 630680520061
Option 1 ID : 6306802032676
Option 2 ID : 6306802032675
Option 3 ID : 6306802032674
Option 4 ID : 6306802032673
Status : Answered
Chosen Option : 3

Q.16 A, B and C are prime numbers such that $A < B < C$. If $A \times B \times C = 182$, then what is the value of $B + C$?

- Ans**
- ☒ 1. 20
 - ☒ 2. 22
 - ☒ 3. 24
 - ☒ 4. 18

Question ID : 630680520055
Option 1 ID : 6306802032650
Option 2 ID : 6306802032651
Option 3 ID : 6306802032652
Option 4 ID : 6306802032649
Status : Not Answered
Chosen Option : --

Q.17 When a number is successively decreased by 10 percent, 20 percent and 34 percent, then it becomes 10692. What is that number?

- Ans** ☒ 1. 22500
☒ 2. 22000
☒ 3. 22250
☒ 4. 25000

Question ID : 630680520057
Option 1 ID : 6306802032657
Option 2 ID : 6306802032660
Option 3 ID : 6306802032658
Option 4 ID : 6306802032659
Status : Not Answered
Chosen Option : --

Q.18 Instead of increasing a number successively by 30 percent and 50 percent, it is decreased by 14.2 percent. Resultant value is what percentage of the required correct value?

- Ans** ☒ 1. 44 percent
☒ 2. 50 percent
☒ 3. 42 percent
☒ 4. 46 percent

Question ID : 630680520056
Option 1 ID : 6306802032655
Option 2 ID : 6306802032653
Option 3 ID : 6306802032656
Option 4 ID : 6306802032654
Status : Not Answered
Chosen Option : --

Q.19 A train of length 480 metres crosses an electric pole in 20 seconds and crosses another train of the same length travelling in opposite direction in 30 seconds. What is the speed of the second train?

- Ans** ☒ 1. 16 metre/second
☒ 2. 12 metre/second
☒ 3. 15 metre/second
☒ 4. 8 metre/second

Question ID : 630680520064
Option 1 ID : 6306802032688
Option 2 ID : 6306802032685
Option 3 ID : 6306802032686
Option 4 ID : 6306802032687
Status : Not Answered
Chosen Option : --

Q.20 D sells a table to E at a profit of 40 percent and E sells it to F at a loss of 40 percent. What is the ratio of cost prices of D and F?

- Ans**
- ☒ 1. 22 : 19
 - ☒ 2. 24 : 23
 - ☒ 3. 23 : 20
 - ☒ 4. 25 : 21

Question ID : 630680520058
Option 1 ID : 6306802032664
Option 2 ID : 6306802032661
Option 3 ID : 6306802032663
Option 4 ID : 6306802032662
Status : Not Answered
Chosen Option : --

Section : Numerical and Logical and Analytical Ability and Reasoning

Q.1 By interchanging the given two signs which of the following equation will be not correct?

+ and -

- Ans**
- ☒ 1. $7 \div 21 \times 42 - 14 + 18 = 20$
 - ☒ 2. $7 + 3 \times 8 \div 6 - 5 = 8$
 - ☒ 3. $63 + 21 \div 7 \times 14 - 8 = 29$
 - ☒ 4. $42 \times 14 \div 28 + 15 - 35 = 41$

Question ID : 630680520025
Option 1 ID : 6306802032529
Option 2 ID : 6306802032532
Option 3 ID : 6306802032531
Option 4 ID : 6306802032530
Status : Not Answered
Chosen Option : --

Q.2 In the following question below are given some statements followed by some conclusions based on those statements. Taking the given statements to be true even if they seem to be at variance from commonly known facts. Read all the conclusions and then decide which of the given conclusion logically follows the given statements.

Statements:

- I. Some bottle are cup.
- II. No plate is bottle.

Conclusion:

- I. No plate is cup.
- II. No bottle is plate.

- Ans**
- ☒ 1. Both conclusions I and II follows
 - ☒ 2. Only conclusion II follows
 - ☒ 3. Only conclusion I follows
 - ☒ 4. Neither conclusion follows

Question ID : 630680520016
Option 1 ID : 6306802032495
Option 2 ID : 6306802032494
Option 3 ID : 6306802032493
Option 4 ID : 6306802032496
Status : Answered
Chosen Option : 2

Q.3 Consider the string given below made up of letter-number-symbol. How many 3 are immediately followed by an alphabet?

N 4 6 D # \$ L 2 3 % @ 3 \$ & # 3 G \$ H @ K # & 5 H 4 D # % 5 3 @ O % 9 V 3 @

- Ans
- ☐ 1. 4
 - ☐ 2. 3
 - ☐ 3. 2
 - ☒ 4. 1

Question ID : 630680520018
Option 1 ID : 6306802032504
Option 2 ID : 6306802032503
Option 3 ID : 6306802032502
Option 4 ID : 6306802032501
Status : Answered
Chosen Option : 4

Q.4 In the following question, select the missing number from the given series.

810, 815, 802, 823, 794, ?

- Ans
- ☒ 1. 831
 - ☐ 2. 832
 - ☐ 3. 830
 - ☐ 4. 828

Question ID : 630680520026
Option 1 ID : 6306802032536
Option 2 ID : 6306802032534
Option 3 ID : 6306802032533
Option 4 ID : 6306802032535
Status : Not Answered
Chosen Option : --

Q.5 Five plays P1, P2, P3, P4 and P5 are to be staged from Monday to Friday of a week. On each day, only one play will be staged. P4 and P5 should not be the first or last to be staged. P5 should be staged immediately before P3. P2 should be staged immediately after P4. One play is staged between P1 and P2. Which play is staged on Wednesday?

- Ans
- ☐ 1. P3
 - ☒ 2. P1
 - ☐ 3. P4
 - ☐ 4. P2

Question ID : 630680520009
Option 1 ID : 6306802032468
Option 2 ID : 6306802032466
Option 3 ID : 6306802032467
Option 4 ID : 6306802032465
Status : Answered
Chosen Option : 4

Q.6 Consider the string given below made up of letter-number-symbol. How many 2's are there?

2 3 \$ 2 % @ \$ & 3 # G 2 \$ 3 H @ 3 K # & 2 5 H 4 D # 2 2 % 5 2 3 @ 2 O % 9 2 V @ 2 3 4
2 2 % 5 2 3

- Ans
- ☒ 1. 12
 - ☒ 2. 13
 - ☐ 3. 10
 - ☐ 4. 11

Question ID : 630680520017
Option 1 ID : 6306802032498
Option 2 ID : 6306802032497
Option 3 ID : 6306802032500
Option 4 ID : 6306802032499

Status : Answered

Chosen Option : 2

Q.7 By interchanging the given two signs which of the following equation will be correct?

+ and -

- Ans
- ☒ 1. $8 + 14 - 7 \times 6 \div 3 = 8$
 - ☐ 2. $21 + 8 \times 7 - 33 \div 3 = 24$
 - ☐ 3. $7 + 9 \times 8 \div 6 - 5 = 1$
 - ☐ 4. $0 \times 4 + 6 \div 2 - 8 = 45$

Question ID : 630680520023
Option 1 ID : 6306802032523
Option 2 ID : 6306802032524
Option 3 ID : 6306802032522
Option 4 ID : 6306802032521

Status : Answered

Chosen Option : 1

Q.8 In the following question, select the related letters from the given alternatives.

CN : ZM :: YE : ?

- Ans
- ☐ 1. MY
 - ☒ 2. VV
 - ☐ 3. UL
 - ☐ 4. ZA

Question ID : 630680520020
Option 1 ID : 6306802032510
Option 2 ID : 6306802032511
Option 3 ID : 6306802032509
Option 4 ID : 6306802032512

Status : Answered

Chosen Option : 2

Q.9 Pointing to a woman, a man said, "Her father is the husband of the mother of the brother of my father". How is that woman related to that man?

- Ans
- ☒ 1. Mother
 - ☒ 2. Mother-in-law
 - ☒ 3. Father's sister
 - ☒ 4. Father's mother

Question ID : 630680520014
Option 1 ID : 6306802032485
Option 2 ID : 6306802032486
Option 3 ID : 6306802032488
Option 4 ID : 6306802032487
Status : Answered
Chosen Option : 4

Q.10 Six lectures A1, A2, A3, A4, A5 and A6 are to be organized in a span of seven days from Sunday to Saturday. Only one lecture on each day in accordance with the following:

- I. There should be a gap of two days between A5 and A4.
- II. A2 should be organised on Tuesday and should not be organized just before A4.
- III. A1 should not be organized on Thursday.
- IV. One day there will be no lecture (Friday is not that day), just before that day A4 will be organised.
- V. A3 should be organised immediately after A6.

Which lecture is organised on Thursday?

- Ans
- ☒ 1. A2
 - ☒ 2. A6
 - ☒ 3. A5
 - ☒ 4. A3

Question ID : 630680520010
Option 1 ID : 6306802032469
Option 2 ID : 6306802032471
Option 3 ID : 6306802032470
Option 4 ID : 6306802032472
Status : Not Answered
Chosen Option : --

Q.11 A series is given with one term missing. Select the correct alternative from the given ones that will complete the series.

RSM4, NTS9, TUO16, PVU25, ?

- Ans
- ☒ 1. VNO36
 - ☒ 2. VWQ36
 - ☒ 3. OMQ49
 - ☒ 4. VNQ49

Question ID : 630680520022
Option 1 ID : 6306802032518
Option 2 ID : 6306802032517
Option 3 ID : 6306802032519
Option 4 ID : 6306802032520
Status : Not Answered
Chosen Option : --

Q.12 In a certain code language, 'PIETY' is written as '15', 'ZTHOU' is written as '18'. What is the code for 'NCHEE' in that code language?

- Ans
- ☒ 1. 4
 - ☒ 2. 8
 - ☒ 3. 7
 - ☒ 4. 5

Question ID : 630680520012
Option 1 ID : 6306802032479
Option 2 ID : 6306802032477
Option 3 ID : 6306802032478
Option 4 ID : 6306802032480
Status : Not Answered
Chosen Option : --

Q.13 In the following question below are given some statements followed by some conclusions based on those statements. Taking the given statements to be true even if they seem to be at variance from commonly known facts. Read all the conclusions and then decide which of the given conclusion logically follows the given statements.

Statements:

- I. No A is B.
- II. Some S are B.

Conclusion:

- I. All B are S.
- II. All A are S.

- Ans
- ☒ 1. Only conclusion II follows
 - ☒ 2. Only conclusion I follows
 - ☒ 3. Neither conclusion follows
 - ☒ 4. Both conclusions I and II follows

Question ID : 630680520015
Option 1 ID : 6306802032490
Option 2 ID : 6306802032489
Option 3 ID : 6306802032492
Option 4 ID : 6306802032491
Status : Answered
Chosen Option : 3

Q.14 By interchanging the given two signs which of the following equation will be not correct?

+ and -

- Ans
- ☒ 1. $5 + 3 + 2 \times 4 - 7 = 6$
 - ☒ 2. $17 + 8 - 11 \times 6 \div 3 = 31$
 - ☒ 3. $48 \times 6 \div 36 + 30 - 20 = -2$
 - ☒ 4. $50 \div 25 \times 30 + 15 - 40 = 85$

Question ID : 630680520024
Option 1 ID : 6306802032527
Option 2 ID : 6306802032525
Option 3 ID : 6306802032528
Option 4 ID : 6306802032526
Status : Answered
Chosen Option : 4

Q.15 Tarun walks 46 km towards East. He turns right and walks 36 km. He again turns right and walks 46 km. How far and in which direction is his starting point from the finishing point?

- Ans

 1. 46 km, North

 2. 36 km, North

 3. 36 km, South

 4. 46 km, South

Question ID : 630680520013

Option 1 ID : 6306802032482

Option 2 ID : 6306802032483

Option 3 ID : 6306802032481

Option 4 ID : 6306802032484

Status : Answered


Chosen Option : 3


Q.16 Consider the string given below made up of letter-number-symbol. How many 4 are immediately followed and preceded by an alphabet?


N 4 6 D # \$ L % @ \$ & # G \$ H N 4 D 6 D # \$ L & 5 N 4 D 6 D # \$ L # % 5 3 N 4 D 6 D # \$ L V @

- Ans

 1. 4

 2. 3

 3. 1

 4. 2

Question ID : 630680520019

Option 1 ID : 6306802032508

Option 2 ID : 6306802032507

Option 3 ID : 6306802032505

Option 4 ID : 6306802032506

Status : Answered

Chosen Option : 2

Q.17 A, B, C, D and E are five friends sitting in a single row facing North. A sitting fourth to the right of C. B is sitting second to the right of C. D sitting to the immediate left of B. Who is sitting on the immediate left of E?

- Ans

 1. B

 2. D

 3. C

 4. A

Question ID : 630680520007

Option 1 ID : 6306802032457

Option 2 ID : 6306802032459

Option 3 ID : 6306802032458

Option 4 ID : 6306802032460

Status : Answered

Chosen Option : 1

Q.18 In a certain code language, 'WALK' is written as 'AFPP'. What is the code for 'BLOW' in that code language?

- Ans
- ☒ 1. FQSC
 - ☒ 2. FQTB
 - ☒ 3. FRSB
 - ☒ 4. FQSB

Question ID : 630680520011
Option 1 ID : 6306802032474
Option 2 ID : 6306802032475
Option 3 ID : 6306802032476
Option 4 ID : 6306802032473
Status : Answered
Chosen Option : 1

Q.19 In the following question, four letter pairs are given. The letters on left side of (–) is related to the letters on the right side of (–) with some Logic/Rule/Relation. Three are similar on basis of same Logic/Rule/Relation. Select the odd one out from the given alternatives.

- Ans
- ☒ 1. JY – RG
 - ☒ 2. DS – LA
 - ☒ 3. RN – ZT
 - ☒ 4. TI – BQ

Question ID : 630680520021
Option 1 ID : 6306802032513
Option 2 ID : 6306802032516
Option 3 ID : 6306802032514
Option 4 ID : 6306802032515
Status : Answered
Chosen Option : 3

Q.20 Eight friends A, B, C, D, E, F, G and H are seated in a straight line and all of them are facing north, but not necessarily in the same order. B sits second to right of F. F sits at one of the extreme ends of the line. Only three people sit between B and E. C sits third to the left of D. Only two people sit between D and A. G is not an immediate neighbour of E. Who is sitting on the immediate left of C?

- Ans
- ☒ 1. H
 - ☒ 2. E
 - ☒ 3. F
 - ☒ 4. G

Question ID : 630680520008
Option 1 ID : 6306802032464
Option 2 ID : 6306802032462
Option 3 ID : 6306802032461
Option 4 ID : 6306802032463
Status : Answered
Chosen Option : 3

Section : English Language

Comprehension:

Read the following passage and answer the questions given below.

The United States and a few European countries make routine use of jury trials even today. Every citizen is expected to serve jury-duty if he/she gets selected as a juror for a case. Once the summons are issued, they are asked to come to court on a particular day, at a particular time. The law states that you must participate and employers can't prevent employees from performing jury duty. Citizens are selected on the basis of their professional, intellectual and social backgrounds.

Jury trials came to India with the British. The first case decided by an English jury was in 1665, when one Mrs. Ascentia Dawes was charged with the murder of her slave, an Indian girl. A jury of six Englishmen and six Portuguese, found her guilty, but she was acquitted because of the 'meniality' of the crime. Jury trials gradually became a biased institution, often ruling in the favour of British, ignoring extreme violence and exploitation of Indians.

SubQuestion No : 1

Q.1 Which word means the same as the word 'acquitted' used in the passage?

- Ans
- ☒ 1. Arraigned
 - ☒ 2. Impeachable
 - ☒ 3. Exonerated
 - ☒ 4. Indicted

Question ID : 630680519986
 Option 1 ID : 6306802032373
 Option 2 ID : 6306802032374
 Option 3 ID : 6306802032375
 Option 4 ID : 6306802032376
 Status : Answered
 Chosen Option : 4

Comprehension:

Read the following passage and answer the questions given below.

The United States and a few European countries make routine use of jury trials even today. Every citizen is expected to serve jury-duty if he/she gets selected as a juror for a case. Once the summons are issued, they are asked to come to court on a particular day, at a particular time. The law states that you must participate and employers can't prevent employees from performing jury duty. Citizens are selected on the basis of their professional, intellectual and social backgrounds.

Jury trials came to India with the British. The first case decided by an English jury was in 1665, when one Mrs. Ascentia Dawes was charged with the murder of her slave, an Indian girl. A jury of six Englishmen and six Portuguese, found her guilty, but she was acquitted because of the 'meniality' of the crime. Jury trials gradually became a biased institution, often ruling in the favour of British, ignoring extreme violence and exploitation of Indians.

SubQuestion No : 2

Q.2 Mrs. Ascentia Dawes was charged with which crime?

- Ans
- ☒ 1. Bribery
 - ☒ 2. Murder
 - ☒ 3. Fraud
 - ☒ 4. Robbery

Question ID : 630680519983
 Option 1 ID : 6306802032361
 Option 2 ID : 6306802032362
 Option 3 ID : 6306802032364
 Option 4 ID : 6306802032363
 Status : Answered
 Chosen Option : 2

Comprehension:

Read the following passage and answer the questions given below.

The United States and a few European countries make routine use of jury trials even today. Every citizen is expected to serve jury-duty if he/she gets selected as a juror for a case. Once the summons are issued, they are asked to come to court on a particular day, at a particular time. The law states that you must participate and employers can't prevent employees from performing jury duty. Citizens are selected on the basis of their professional, intellectual and social backgrounds.

Jury trials came to India with the British. The first case decided by an English jury was in 1665, when one Mrs. Ascentia Dawes was charged with the murder of her slave, an Indian girl. A jury of six Englishmen and six Portuguese, found her guilty, but she was acquitted because of the 'meniality' of the crime. Jury trials gradually became a biased institution, often ruling in the favour of British, ignoring extreme violence and exploitation of Indians.

SubQuestion No : 3

Q.3 Which of the following statements can be inferred from the passage?

- Ans ☒ 1. A proper exam is conducted in the US to select a juror.
- ☒ 2. The law of the US doesn't promote the active participation of people in jury trials.
- ☒ 3. Before the arrival of British in India, there were no jury trials.
- ☒ 4. Indian people were highly favoured in the jury trials.

Question ID : 630680519984
Option 1 ID : 6306802032365
Option 2 ID : 6306802032368
Option 3 ID : 6306802032366
Option 4 ID : 6306802032367
Status : Answered
Chosen Option : 3

Comprehension:

Read the following passage and answer the questions given below.

The United States and a few European countries make routine use of jury trials even today. Every citizen is expected to serve jury-duty if he/she gets selected as a juror for a case. Once the summons are issued, they are asked to come to court on a particular day, at a particular time. The law states that you must participate and employers can't prevent employees from performing jury duty. Citizens are selected on the basis of their professional, intellectual and social backgrounds.

Jury trials came to India with the British. The first case decided by an English jury was in 1665, when one Mrs. Ascentia Dawes was charged with the murder of her slave, an Indian girl. A jury of six Englishmen and six Portuguese, found her guilty, but she was acquitted because of the 'meniality' of the crime. Jury trials gradually became a biased institution, often ruling in the favour of British, ignoring extreme violence and exploitation of Indians.

SubQuestion No : 4

Q.4 What is the most appropriate tone of the given passage?

- Ans ☒ 1. Apologetic
- ☒ 2. Vituperative
- ☒ 3. Introspective
- ☒ 4. Technical

Question ID : 630680519985
Option 1 ID : 6306802032372
Option 2 ID : 6306802032369
Option 3 ID : 6306802032370
Option 4 ID : 6306802032371
Status : Answered
Chosen Option : 3

Q.5 Choose the most appropriate synonym of the underlined word.

Production relocation to Africa and South America have allowed Chinese enterprises to circumvent trade caps.

- Ans ☒ 1. Simulate
☒ 2. Contort
☒ 3. Evade
☒ 4. Visualize

Question ID : 630680519978
Option 1 ID : 6306802032347
Option 2 ID : 6306802032345
Option 3 ID : 6306802032346
Option 4 ID : 6306802032348
Status : Answered
Chosen Option : 3

Q.6 Select the incorrectly spelt word from the given sentence.

Floods are not new to India and this sub-continent, but in recent years the problem has recieved much greater attention.

- Ans ☒ 1. continent
☒ 2. attention
☒ 3. recent
☒ 4. recieved

Question ID : 630680519981
Option 1 ID : 6306802032357
Option 2 ID : 6306802032360
Option 3 ID : 6306802032358
Option 4 ID : 6306802032359
Status : Not Answered
Chosen Option : --

Q.7 Select the most appropriate option for the given blank.

The word moved over me like _____ finger of ice.

- Ans ☒ 1. a
☒ 2. an
☒ 3. the
☒ 4. No article

Question ID : 630680519966
Option 1 ID : 6306802032298
Option 2 ID : 6306802032299
Option 3 ID : 6306802032297
Option 4 ID : 6306802032300
Status : Answered
Chosen Option : 1

Q.8 Select the most appropriate option for the given blank.

Your light _____ so brightly that it touched so many of us, impacted the lives of many more, and _____ the game forever.

- Ans

✗ 1. had shone, changing

✗ 2. shines, had changed

✓ 3. shone, changed

✗ 4. has shone, has changed

Question ID : 630680519971
 Option 1 ID : 6306802032318
 Option 2 ID : 6306802032320
 Option 3 ID : 6306802032319
 Option 4 ID : 6306802032317
 Status : Answered
 Chosen Option : 2

Q.9 Choose the idiom/phrase that can substitute the highlighted group of words meaningfully.

This office has become expensive to maintain and difficult to dispose of as it no longer generates any profit.

- Ans

✗ 1. Til the cows come home

✗ 2. Start off on the wrong foot

✗ 3. Scapegoat

✓ 4. A white elephant

Question ID : 630680519976
 Option 1 ID : 6306802032337
 Option 2 ID : 6306802032339
 Option 3 ID : 6306802032338
 Option 4 ID : 6306802032340
 Status : Answered
 Chosen Option : 4

Q.10 Choose the word that can substitute the given group of words.

A person who stirs up public feelings especially of discontent

- Ans

✗ 1. Reconciler

✓ 2. Demagogue

✗ 3. Unites

✗ 4. Saint

Question ID : 630680519975
 Option 1 ID : 6306802032334
 Option 2 ID : 6306802032336
 Option 3 ID : 6306802032335
 Option 4 ID : 6306802032333
 Status : Answered
 Chosen Option : 2

Q.11 Select the most appropriate option for the given blank.

I didn't speak to the sage again _____ many years.

- Ans ☒ 1. for
☒ 2. by
☒ 3. of
☒ 4. since

Question ID : 630680519968
Option 1 ID : 6306802032306
Option 2 ID : 6306802032308
Option 3 ID : 6306802032307
Option 4 ID : 6306802032305
Status : Answered
Chosen Option : 1

Q.12 Select the most appropriate option for the given blank.

They are having _____ breakfast in my room.

- Ans ☒ 1. an
☒ 2. a
☒ 3. the
☒ 4. No article

Question ID : 630680519967
Option 1 ID : 6306802032303
Option 2 ID : 6306802032302
Option 3 ID : 6306802032301
Option 4 ID : 6306802032304
Status : Answered
Chosen Option : 4

Q.13 Rearrange the parts of the sentence in correct order.

Interpreting the facial

P. of others is a vital element of social
Q. interaction that allow us to make rapid
R. inferences about others' mental states
S. expression, tone of voice and gestures

- Ans ☒ 1. QPSR
☒ 2. SPQR
☒ 3. PSQR
☒ 4. SRQP

Question ID : 630680519972
Option 1 ID : 6306802032323
Option 2 ID : 6306802032322
Option 3 ID : 6306802032324
Option 4 ID : 6306802032321
Status : Answered
Chosen Option : 2

Q.14 Select the sentence with no spelling errors.

- Ans

✓ 1. Hardwood trees shed their leaves annually, and they are called deciduous trees.

✗ 2. Hardwood trees shed there leaves annually, and they are called deciduous trees.

✗ 3. Hardwood trees shed their leaves anually, and they are called deciduous trees.

✗ 4. Hardwood trees shed their leaves annually, and they are called decidous trees.

Question ID : 630680519980

Option 1 ID : 6306802032353

Option 2 ID : 6306802032354

Option 3 ID : 6306802032355

Option 4 ID : 6306802032356

Status : Answered

Chosen Option : 1

Q.15 Choose the word that can substitute the given group of words.

An unexpected gain

- Ans

✗ 1. Bounty

✗ 2. Waterfall

✗ 3. Hex

✓ 4. Windfall

Question ID : 630680519974

Option 1 ID : 6306802032330

Option 2 ID : 6306802032332

Option 3 ID : 6306802032329

Option 4 ID : 6306802032331

Status : Answered

Chosen Option : 4

Q.16 Rearrange the parts of the sentence in correct order.

P. mass reductions of the Greenland Ice Sheet have substantial

Q. impacts on global sea level and the speed of the Atlantic

R. freshwater caused by increased meltwater runoff into the northern Atlantic

S. Meridional Overturning Circulation, due to the additional

- Ans

✓ 1. PQSR

✗ 2. SRQP

✗ 3. PQRS

✗ 4. RPQS

Question ID : 630680519973

Option 1 ID : 6306802032326

Option 2 ID : 6306802032328

Option 3 ID : 6306802032327

Option 4 ID : 6306802032325

Status : Answered

Chosen Option : 1

Q.17 Select the most appropriate option for the given blank.

Over the last two decades of her life, she suffered _____ various health problems, but nothing could dissuade her _____ fulfilling her mission.

- Ans ☒ 1. from, from
☒ 2. of, with
☒ 3. with, on
☒ 4. off, of

Question ID : 630680519970
 Option 1 ID : 6306802032315
 Option 2 ID : 6306802032316
 Option 3 ID : 6306802032313
 Option 4 ID : 6306802032314
 Status : Answered
 Chosen Option : 1

Q.18 Select the most appropriate option for the given blank.

Add _____ exercise in your routine.

- Ans ☒ 1. some
☒ 2. very
☒ 3. too
☒ 4. so

Question ID : 630680519969
 Option 1 ID : 6306802032311
 Option 2 ID : 6306802032309
 Option 3 ID : 6306802032312
 Option 4 ID : 6306802032310
 Status : Answered
 Chosen Option : 1

Q.19 Choose the idiom/phrase that can substitute the highlighted group of words meaningfully.

Your words are not enough for this. I want everything in writing.

- Ans ☒ 1. Weal and woe
☒ 2. Black and white
☒ 3. Break a leg
☒ 4. Spill the beans

Question ID : 630680519977
 Option 1 ID : 6306802032341
 Option 2 ID : 6306802032344
 Option 3 ID : 6306802032342
 Option 4 ID : 6306802032343
 Status : Answered
 Chosen Option : 2

Q.20 Choose the most appropriate antonym of the underlined word.

Avoid verbose marketing lingo and keep answers short and concise.

- Ans
- ☒ 1. Flowery
 - ☒ 2. Talkative
 - ☒ 3. Elaborate
 - ☒ 4. Terse

Question ID : 630680519979

Option 1 ID : 6306802032351

Option 2 ID : 6306802032352

Option 3 ID : 6306802032350

Option 4 ID : 6306802032349

Status : Answered

Chosen Option : 4

